

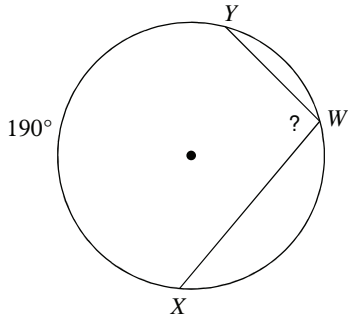
# Inscribed Angles

© 2012 Kuta Software LLC. All rights reserved.

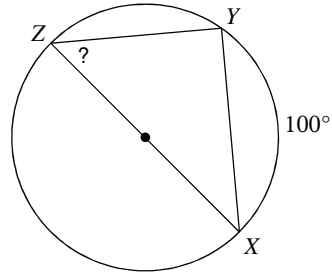
Date \_\_\_\_\_ Period \_\_\_\_\_

**Find the measure of the arc or angle indicated.**

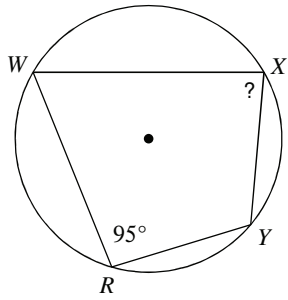
1)



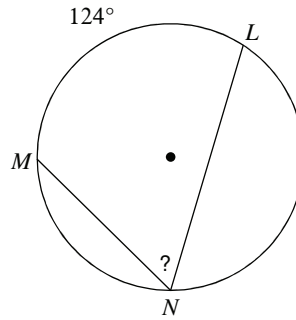
2)



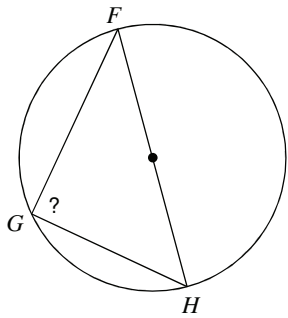
3)



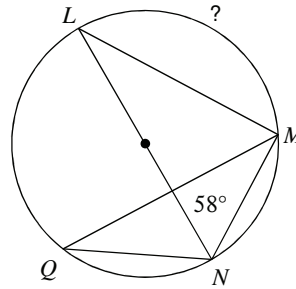
4)



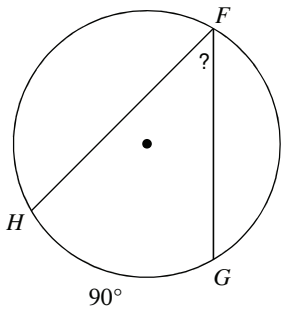
5)



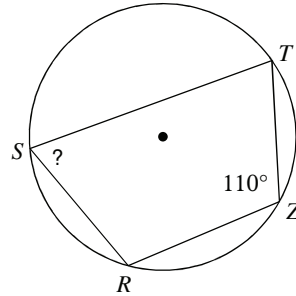
6)



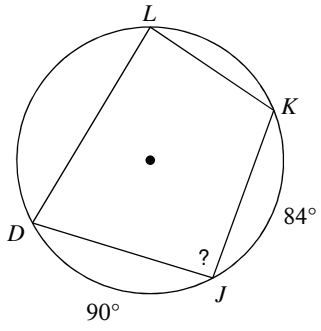
7)



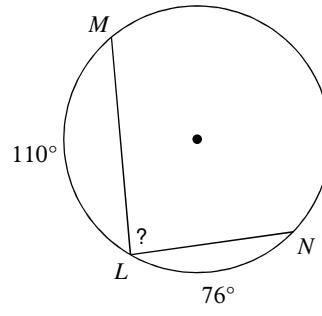
8)



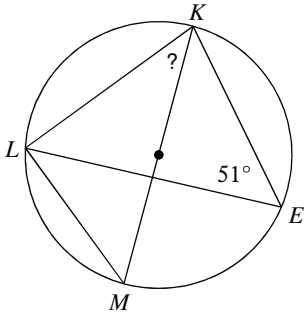
9)



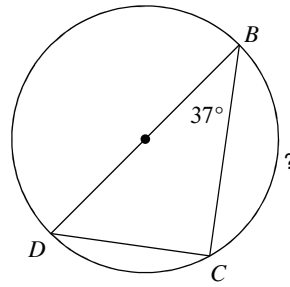
10)



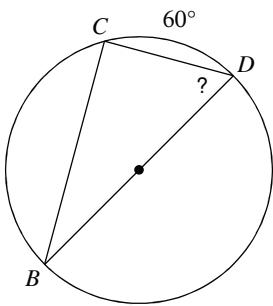
11)



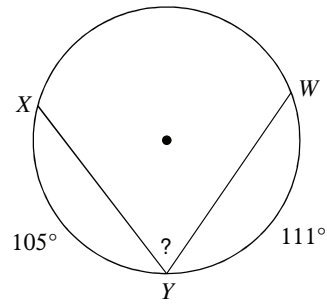
12)



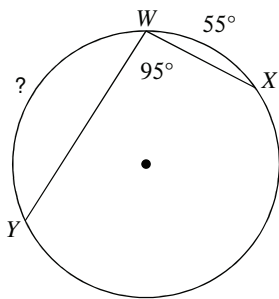
13)



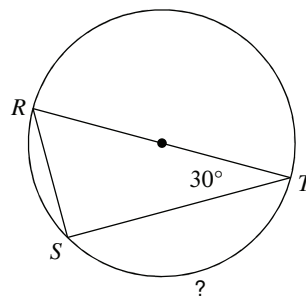
14)



15)



16)



## Answers to Inscribed Angles (ID: 1)

1)  $95^\circ$

5)  $90^\circ$

9)  $93^\circ$

13)  $60^\circ$

2)  $50^\circ$

6)  $116^\circ$

10)  $87^\circ$

14)  $72^\circ$

3)  $85^\circ$

7)  $45^\circ$

11)  $39^\circ$

15)  $115^\circ$

4)  $62^\circ$

8)  $70^\circ$

12)  $106^\circ$

16)  $120^\circ$