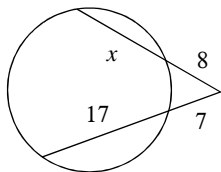


Segments (Secants and Tangents)

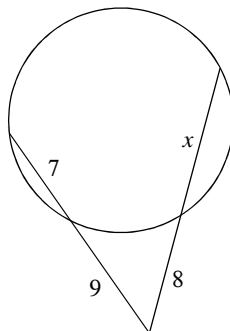
© 2012 Kuta Software LLC. All rights reserved.

Solve for x . Assume that lines which appear tangent are tangent.

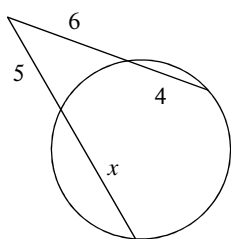
1)



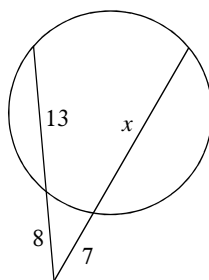
2)



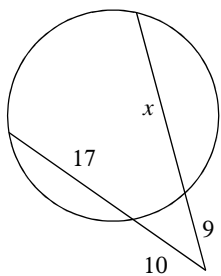
3)



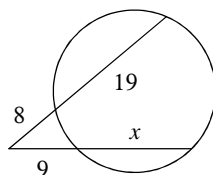
4)



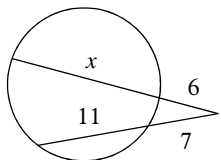
5)



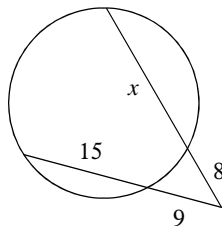
6)



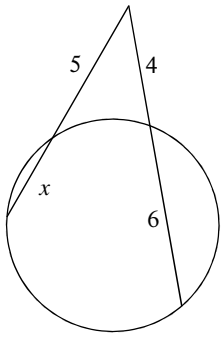
7)



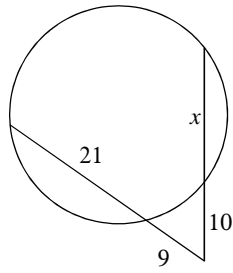
8)



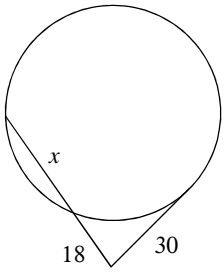
9)



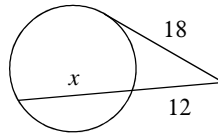
10)



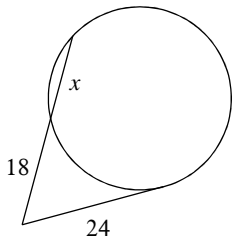
11)



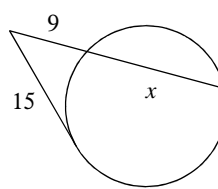
12)



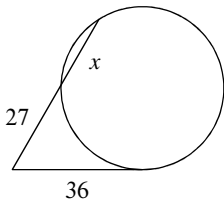
13)



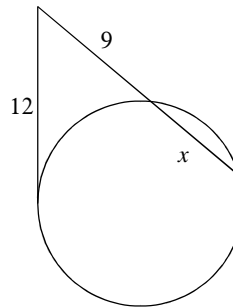
14)



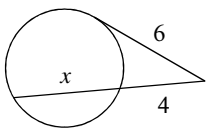
15)



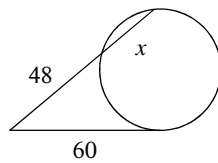
16)



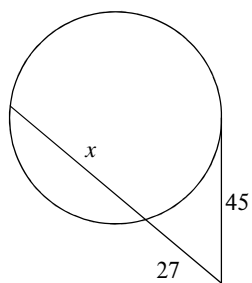
17)



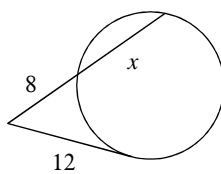
18)



19)



20)



Answers to Segments (Secants and Tangents) (ID: 1)

1) 13

2) 10

3) 7

4) 17

5) 21

6) 15

7) 15

8) 19

9) 3

10) 17

11) 32

12) 15

13) 14

14) 16

15) 21

16) 7

17) 5

18) 27

19) 48

20) 10